

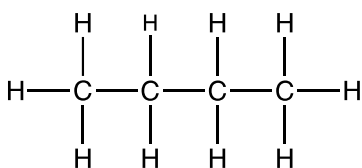
Introduction to Isomers

Define a **constitutional isomer**.

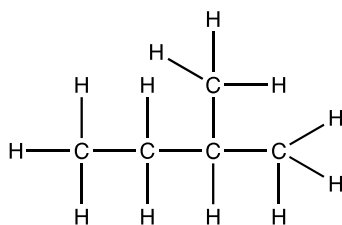
Draw 3 isomers for C_5H_{12} .

Which of the following are isomers?

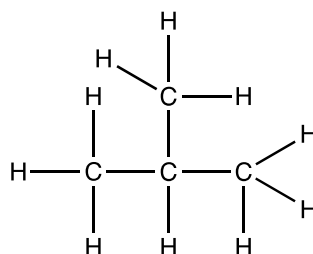
a)



b)

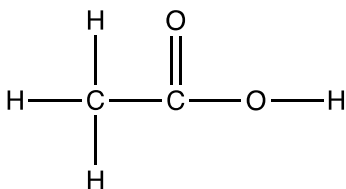


c)

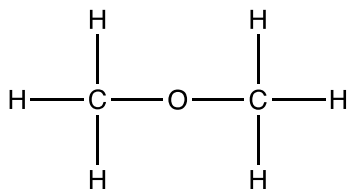


Which of the following are isomers?

a)



b)



c)

