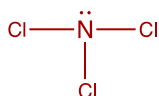


## Lewis Structures Part 1

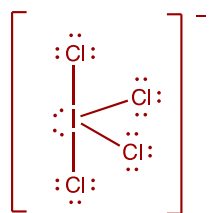
Draw an electron dot structure for the elements in Period 3.



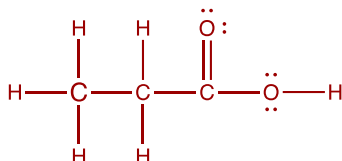
Draw the Lewis structure for  $\text{NCl}_3$ .



Draw a Lewis structure for  $\text{ICl}_4^-$ .



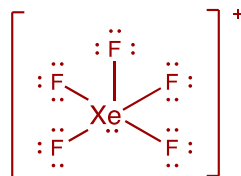
Draw a Lewis structure for  $\text{CH}_3\text{CH}_2\text{COOH}$ .



Draw a Lewis Structure for  $\text{O}_3$ . Include any resonance structures



Draw a Lewis structure for  $\text{XeF}_5^+$ .



Draw a Lewis structure for  $\text{I}_3$ .



Draw a Lewis structure for  $\text{N}_2\text{H}_4$ .

